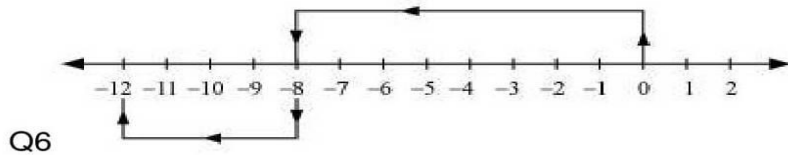


Which expression when calculated is represented by the given number line?

- (a) $(-4) + (-7) + 5$ (b) $(-4) + (-3) + 12$
 (c) $(-4) + (-7) + (-5)$ (d) $(-4) + (-3) + (-12)$

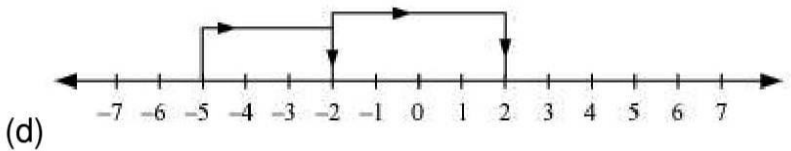
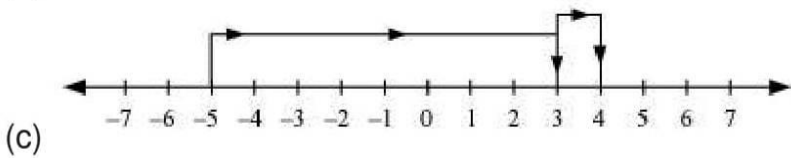
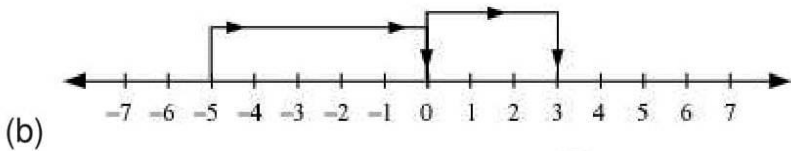
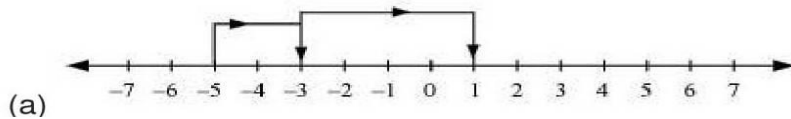


Which expression is represented by the given number line?

- (a) $(-8) - (+4)$ (b) $(-8) + 12$ (c) $8 - (-4)$ (d) $8 + (-12)$

Q7 Which number line shows the correct expression

$[-5 + 3 - (-4)]$?



Q8 What is the value of the expression

$18 - (-7) + (-2) - (+8)$

- (a) -18 (b) -15 (c) 15 (d) 18